


TELLING TIME TO THE NEAREST 5 MINUTES


NAME: _____ DATE: _____

DIRECTIONS: WRITE THE TIME IN DIGITAL FORM UNDERNEATH EACH CLOCK


1.




2.




3.



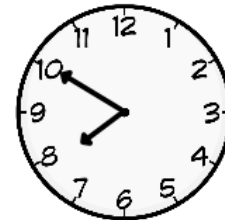
4.



5.



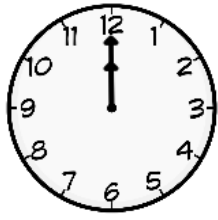
6.



7.




8.




9.




10.




11.




12.



13.



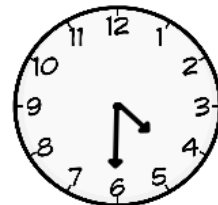
14.




15.




16.



17.



18.




TELLING TIME TO THE NEAREST 5 MINUTES

NAME: _____ DATE: _____


DIRECTIONS: WRITE THE TIME IN DIGITAL FORM UNDERNEATH EACH CLOCK

1.




12 : 25

2.




10 : 10

3.




7 : 55

4.



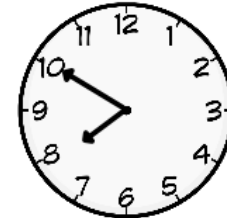
3 : 15

5.



6 : 05

6.




7 : 50

7.



5 : 30

8.




12 : 00

9.




10 : 55

10.



9 : 55

11.



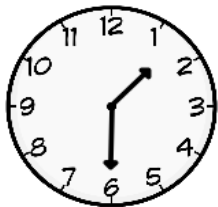
11 : 20

12.




7 : 30

13.




1 : 30

14.



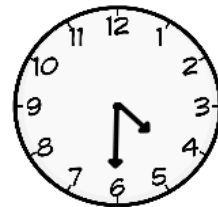
1 : 35

15.



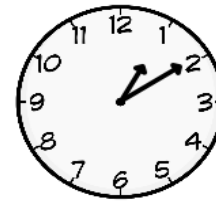
8 : 50

16.




4 : 30

17.



1 : 10

18.



11 : 00